


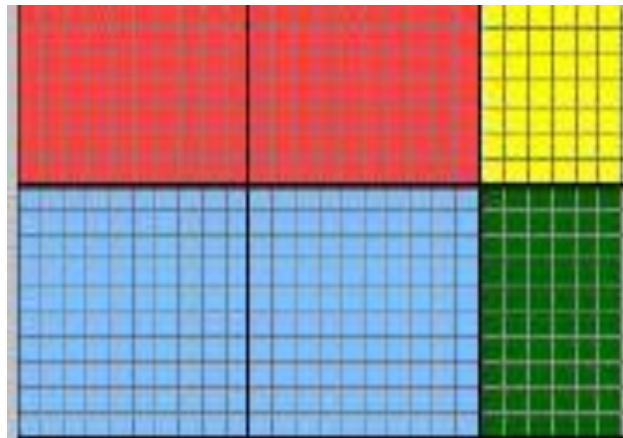
Card Set A



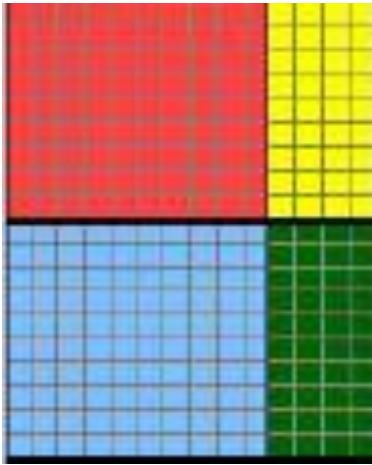
Card Set A



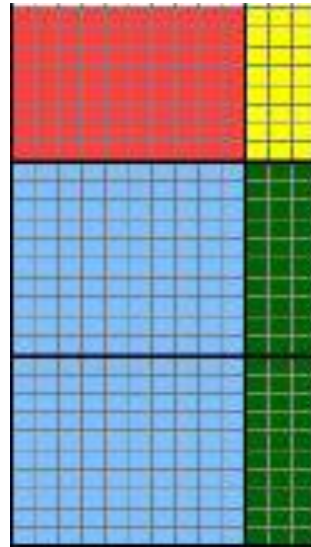
Card Set A



Card Set A



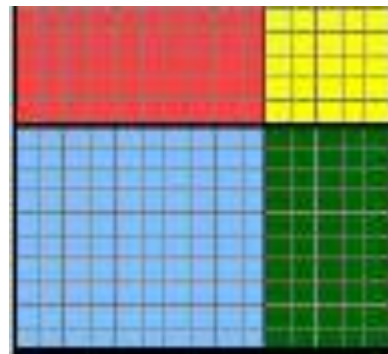
Card Set A



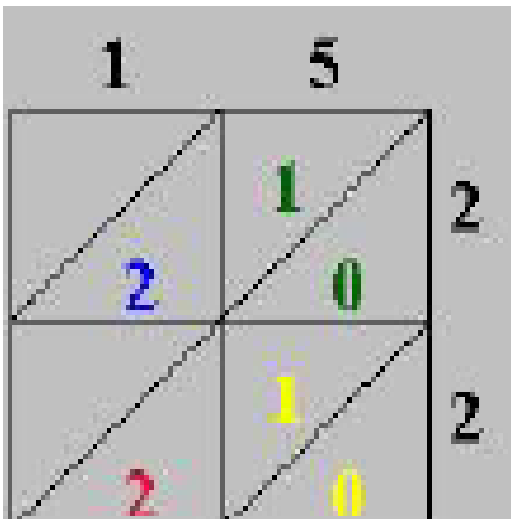
Card Set A



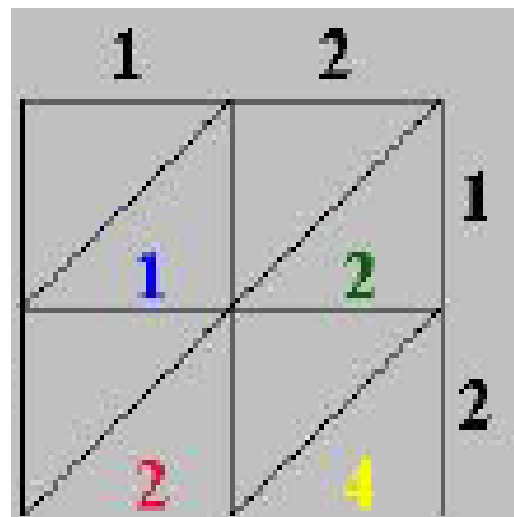
Card Set A



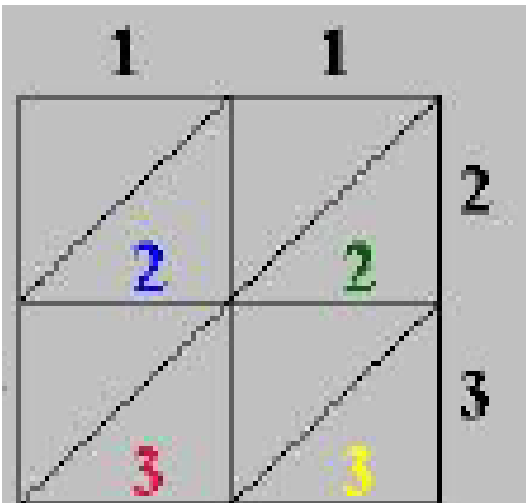
Card Set A



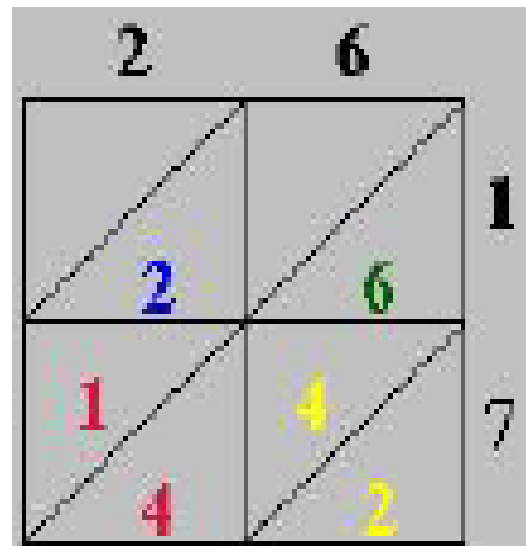
Card Set B



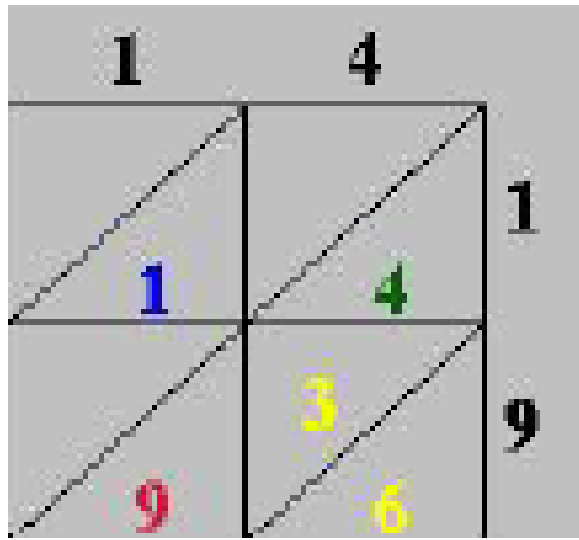
Card Set B



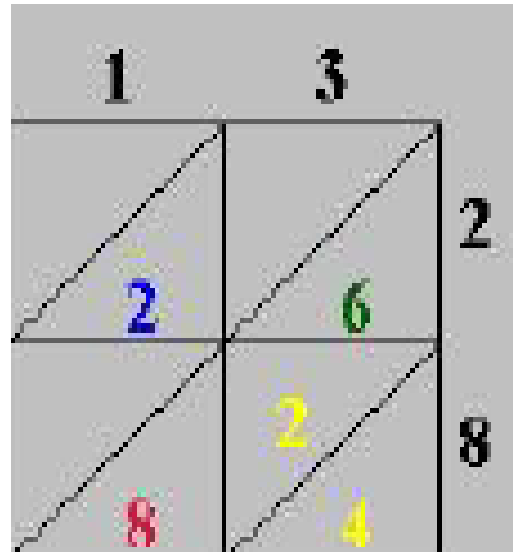
Card Set B



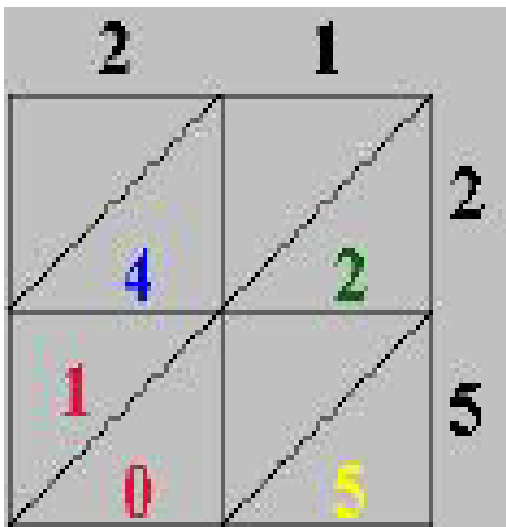
Card Set B



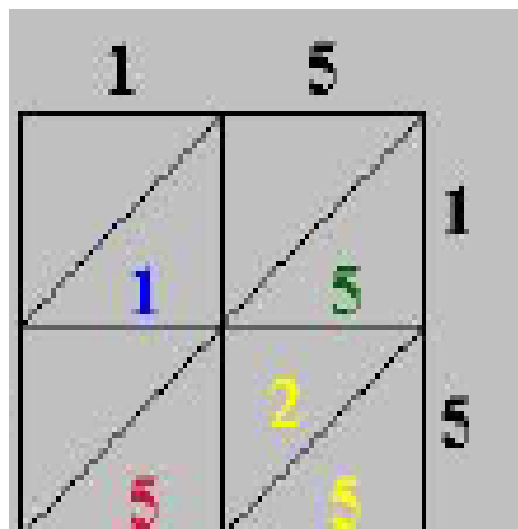
Card Set B



Card Set B



Card Set B



Card Set B

$$(20 + 2) \times (10 + 5) =$$

$$20 \times 10 + 2 \times 10 + 20 \times 5 + 2 \times 5 =$$

Card Set C

$$(20 + 3) \times (10 + 1) =$$

$$20 \times 10 + 3 \times 10 + 20 \times 1 + 3 \times 1 =$$

Card Set C

$$(10 + 9) \times (10 + 4) =$$

$$10 \times 10 + 9 \times 10 + 10 \times 4 + 9 \times 4 =$$

Card Set C

$$(20 + 5) \times (20 + 1) =$$

$$20 \times 20 + 5 \times 20 + 20 \times 1 + 5 \times 1 =$$

Card Set C

$$(10 + 2) \times (10 + 2) =$$

$$10 \times 10 + 2 \times 10 + 10 \times 2 + 2 \times 2 =$$

Card Set C

$$(10 + 7) \times (20 + 6) =$$

$$10 \times 20 + 7 \times 20 + 10 \times 6 + 7 \times 6 =$$

Card Set C

$$(20 + 8) \times (10 + 3) =$$

$$20 \times 10 + 8 \times 10 + 20 \times 3 + 8 \times 3 =$$

Card Set C

$$(10 + 5) \times (10 + 5) =$$

$$10 \times 10 + 5 \times 10 + 10 \times 5 + 5 \times 5 =$$

Card Set C

$$\begin{array}{r} 15 \\ \times 22 \\ \hline 10 \\ 20 \\ 100 \\ \underline{200} \end{array}$$

Card Set D

$$\begin{array}{r} 12 \\ \times 12 \\ \hline 4 \\ 20 \\ 20 \\ \underline{100} \end{array}$$

Card Set D

$$\begin{array}{r} 11 \\ \times 23 \\ \hline 3 \\ 30 \\ 20 \\ \underline{200} \end{array}$$

Card Set D

$$\begin{array}{r} 26 \\ \times 17 \\ \hline 42 \\ 140 \\ 60 \\ \underline{200} \end{array}$$

Card Set D

$$\begin{array}{r} 14 \\ \times 19 \\ \hline 36 \\ 90 \\ 40 \\ \hline 100 \end{array}$$

Card Set D

$$\begin{array}{r} 13 \\ \times 28 \\ \hline 24 \\ 80 \\ 60 \\ \hline 200 \end{array}$$

Card Set D

$$\begin{array}{r} 21 \\ \times 25 \\ \hline 5 \\ 100 \\ 20 \\ \hline 400 \end{array}$$

Card Set D

$$\begin{array}{r} 15 \\ \times 15 \\ \hline 25 \\ 50 \\ 50 \\ \hline 100 \end{array}$$

Card Set D



$$\begin{array}{r} 26 \\ \times 17 \\ \hline 182 \\ 260 \\ \hline \end{array}$$

Card Set E

$$\begin{array}{r} 14 \\ \times 19 \\ \hline 126 \\ 140 \\ \hline \end{array}$$

Card Set E

$$\begin{array}{r} 15 \\ \times 22 \\ \hline 30 \\ 300 \\ \hline \end{array}$$

Card Set E

$$\begin{array}{r} 12 \\ \times 12 \\ \hline 24 \\ 120 \\ \hline \end{array}$$

Card Set E

$$\begin{array}{r} 11 \\ \times 23 \\ \hline 33 \\ 220 \\ \hline \end{array}$$

Card Set E

$$\begin{array}{r} 13 \\ \times 28 \\ \hline 104 \\ 260 \\ \hline \end{array}$$

Card Set E

$$\begin{array}{r} 21 \\ \times 25 \\ \hline 105 \\ 420 \\ \hline \end{array}$$

Card Set E

$$\begin{array}{r} 15 \\ \times 15 \\ \hline 75 \\ 150 \\ \hline \end{array}$$

Card Set E

**The deck Scott is building needs twenty-six boards and each board needs seventeen nails. How many nails does Scott need to buy?**

Card Set F

**An opossum sleeps an average of nineteen hours per day. How many hours does it sleep in a 2-week time period?**

Card Set F

**Cam bought thirteen different colored folders and each had twenty-eight dots. How many total dots are on her folders?**

Card Set F

**Each pack of baseball cards has fifteen cards. How many cards are in twenty-two packs?**

Card Set F

**How many eggs are  
in twelve dozen?**

Card Set F

**The boy scouts eat  
twenty-three  
grapes each on  
their campout.  
How many total  
grapes did the  
troop of eleven  
boys eat?**

Card Set F

**Bags of Reese's  
cups have twenty-  
one individually  
wrapped peanut  
butter cups. How  
many cups are in  
twenty-five bags?**

Card Set F

**The zoo has fifteen  
monkeys who eat  
fifteen bananas  
each day. How  
many bananas do  
they need each day  
for the monkeys?**

Card Set F